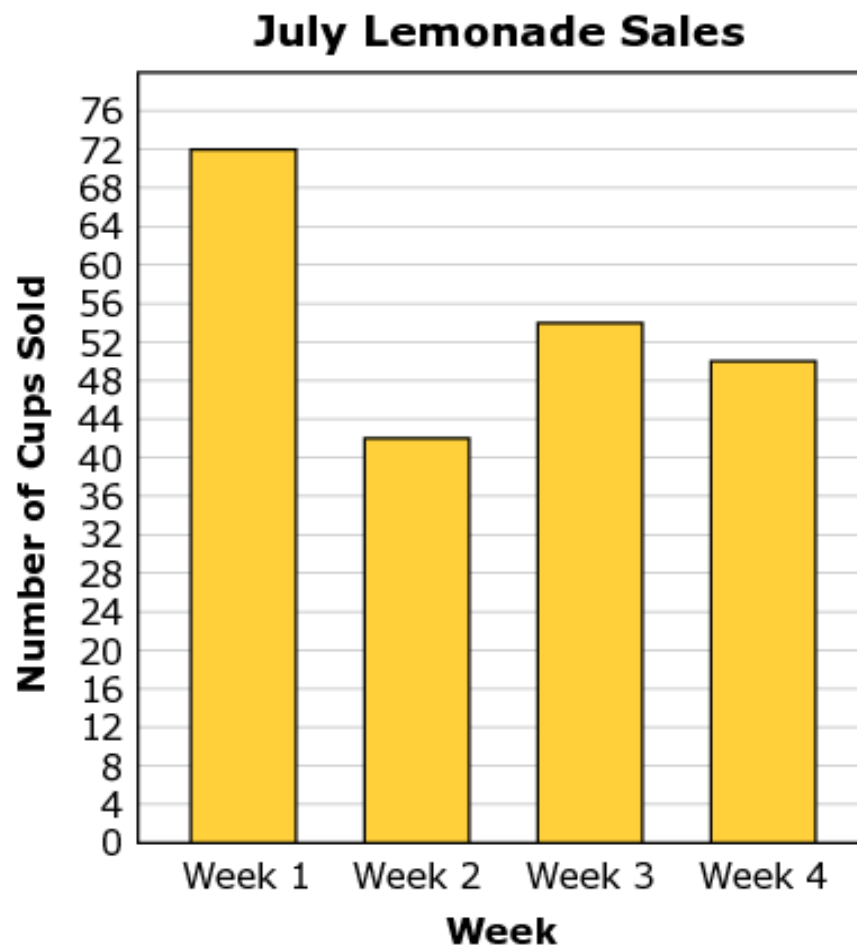


## Grade 3 Mathematics Sample Performance Task Student Worksheet

- Jaleen has a lemonade stand. The bar graph below shows the number of lemonade cups sold in each of four weeks in July.



Use the **July Lemonade Sales** bar graph to complete this task.

The bar graph shows how many cups of lemonade Jaleen sold in July. Complete the table to show how many cups Jaleen sold each week.

July Lemonade Sales	
Week	Cups Sold
1	<input type="text"/>
2	<input type="text"/>
3	<input type="text"/>
4	<input type="text"/>

2. How many total cups of lemonade did Jaleen sell in July?

←

→

↶

↷

✕

1	2	3
4	5	6
7	8	9
0		

**3.** Jaleen also sold lemonade for 4 weeks in August. She compares her weekly sales in July to her weekly sales in August.

- For week 1, she sold 22 fewer cups in August than in July.
- For week 2, she sold 18 more cups in August than in July.
- For week 3, she sold 26 more cups in August than in July.
- For week 4, she sold 25 fewer cups in August than in July.

Complete the table to show how many cups Jaleen sold each week in August.

<b>August Lemonade Sales</b>	
<b>Week</b>	<b>Cups Sold</b>
1	<input type="text"/>
2	<input type="text"/>
3	<input type="text"/>
4	<input type="text"/>

4. Use the **August Lemonade Sales** from Item 3 to complete this task.

Create a picture graph that shows the number of cups of lemonade Jaleen sold each week in August.

In the graph, you may use whole and half pictures for each cup.

- First, click on the key to show the scale that you will use for your graph.
- Then, click on the cups to create the graph.

**A. Select the key you will use.**



= 4 cups



























= 10 cups



= 20 cups

**B. New picture graph**

**August Lemonade Sales**

Week	Lemonade
Week 1	       
Week 2	       
Week 3	       
Week 4	